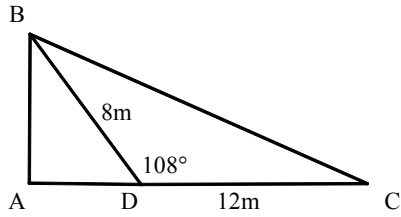
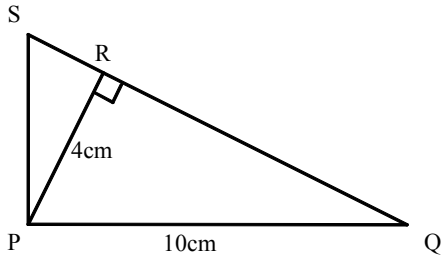


### Problems using Trigonometry

1) Find: (a) AB (b) AC (c) angle CBD (d) BC

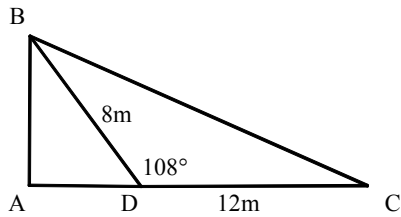


2) Find RS

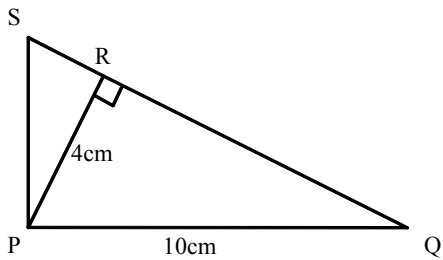


### Problems using Trigonometry

1) Find: (a) AB (b) AC (c) angle CBD (d) BC

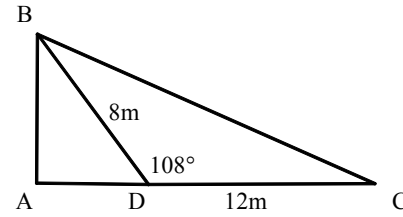


2) Find RS

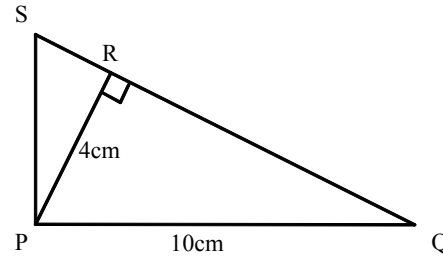


### Problems using Trigonometry

1) Find: (a) AB (b) AC (c) angle CBD (d) BC

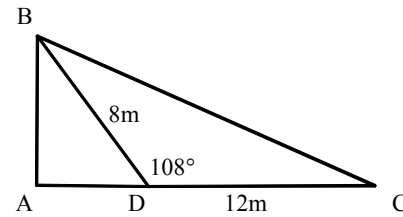


2) Find RS



### Problems using Trigonometry

1) Find: (a) AB (b) AC (c) angle CBD (d) BC



2) Find RS

