

Past Paper Questions – Angles in Circles

13.

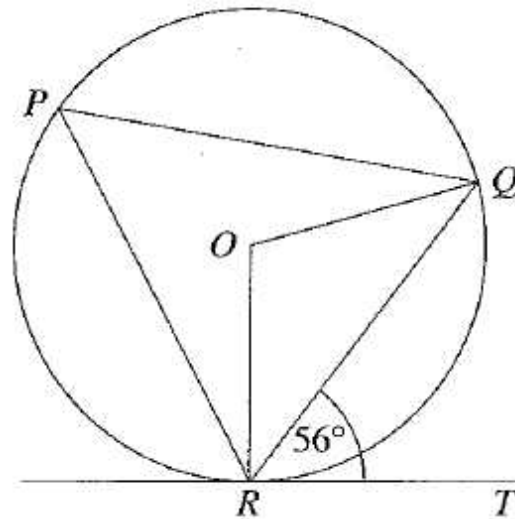


Diagram **NOT** accurately drawn

$P$ ,  $Q$  and  $R$  are points on a circle.  
 $O$  is the centre of the circle.  
 $RT$  is the tangent to the circle at  $R$ .  
Angle  $QRT = 56^\circ$ .

- (a) Find
- (i) the size of angle  $RPQ$ ,

- (ii) the size of angle  $ROQ$ .

.....

.....

(2)

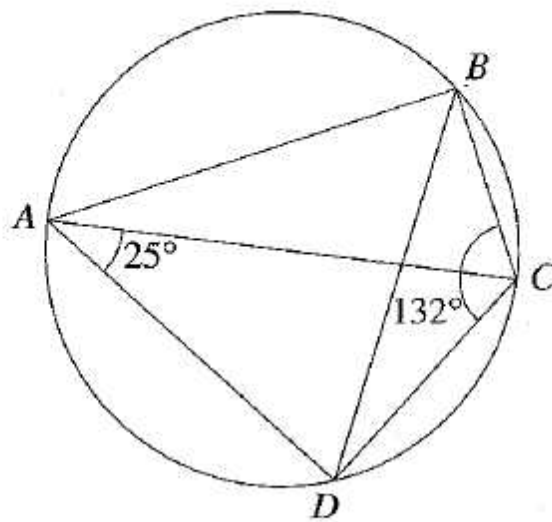


Diagram NOT accurately drawn

$A, B, C$  and  $D$  are points on a circle.  
 $AC$  is a diameter of the circle.  
 Angle  $CAD = 25^\circ$  and angle  $BCD = 132^\circ$ .

(b) Calculate

(i) the size of angle  $BAC$ ,

(ii) the size of angle  $ABD$ .

.....

.....

(3)

10.

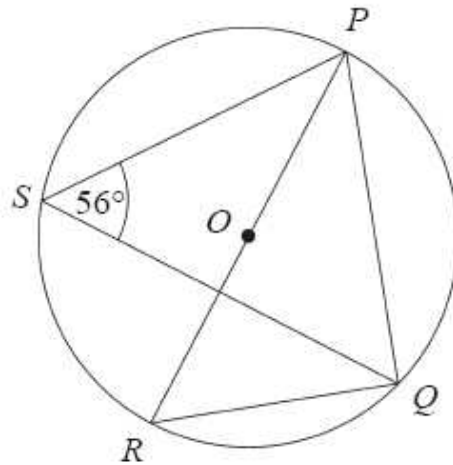


Diagram **NOT** accurately drawn

$P$ ,  $Q$ ,  $R$  and  $S$  are points on the circumference of a circle, centre  $O$ .  
 $PR$  is a diameter of the circle.  
Angle  $PSQ = 56^\circ$ .

- (a) Find the size of angle  $PQR$ .  
Give a reason for your answer.

.....  
(2)

- (b) Find the size of angle  $PRQ$ .  
Give a reason for your answer.

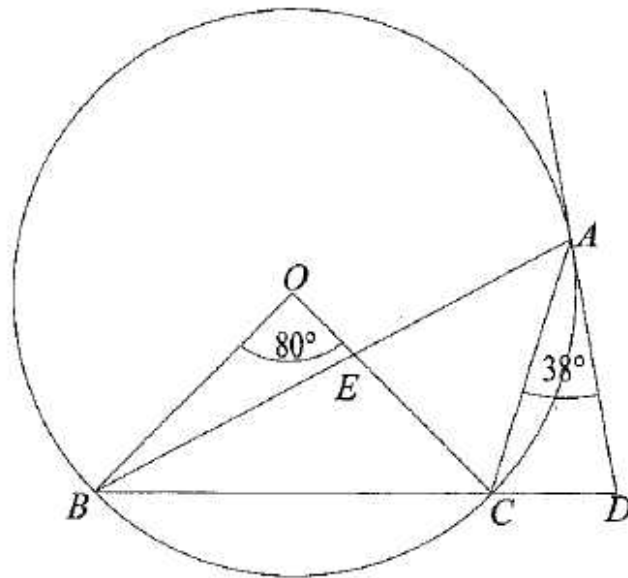
.....  
(2)

- (c) Find the size of angle  $POQ$ .  
Give a reason for your answer.

.....  
(2)

12.

Diagram NOT  
accurately drawn.



Points  $A$ ,  $B$  and  $C$  lie on the circumference of a circle with centre  $O$ .  
 $DA$  is the tangent to the circle at  $A$ .  
 $BCD$  is a straight line.  
 $OC$  and  $AB$  intersect at  $E$ .

Angle  $BOC = 80^\circ$ .  
Angle  $CAD = 38^\circ$ .

(a) Calculate the size of angle  $BAC$ .

.....<sup>o</sup>  
(1)

(b) Calculate the size of angle  $OBA$ .

.....<sup>o</sup>  
(3)

(c) Give a reason why it is not possible to draw a circle with diameter  $ED$  through the point  $A$ .

.....  
.....  
(1)

12.

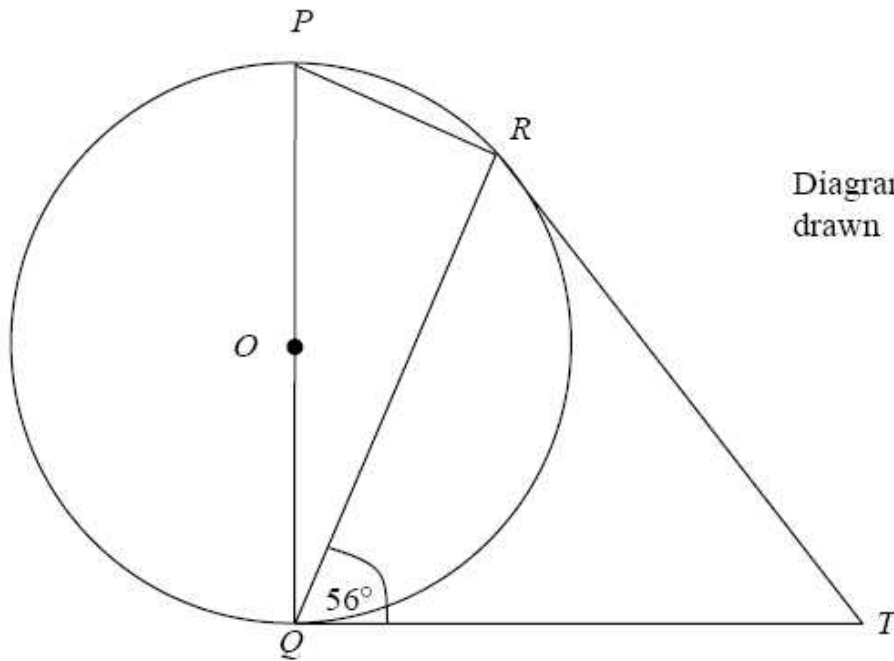


Diagram **NOT** accurately drawn

$P$ ,  $Q$  and  $R$  are points on a circle, centre  $O$ .  
 $POQ$  is a straight line.  
 $TQ$  and  $TR$  are tangents to the circle.  
Angle  $TQR = 56^\circ$ .

- (a) Explain why angle  $PQR = 34^\circ$ .

.....  
.....

(1)

- (b) Calculate the size of angle  $PRT$ .  
Give reasons for your answer.

.....<sup>o</sup>  
(3)