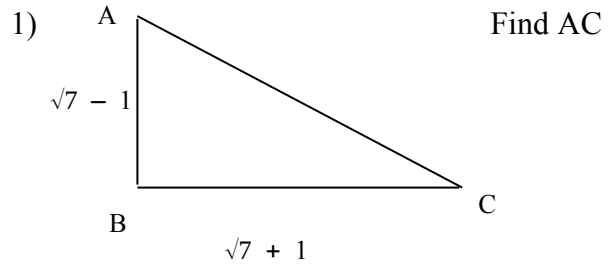
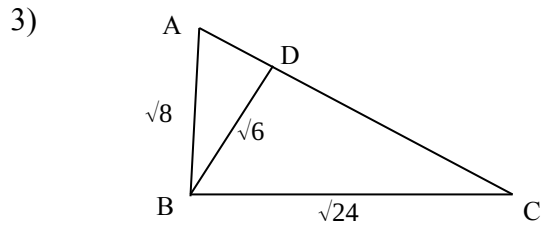


Problems involving surds

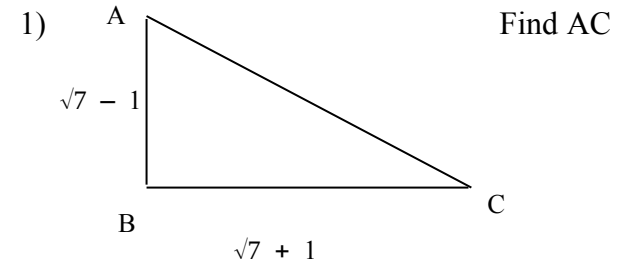


2) Prove that $\sqrt{11+6\sqrt{2}}+\sqrt{11-6\sqrt{2}} = 6$
 [Hint: square this expression]

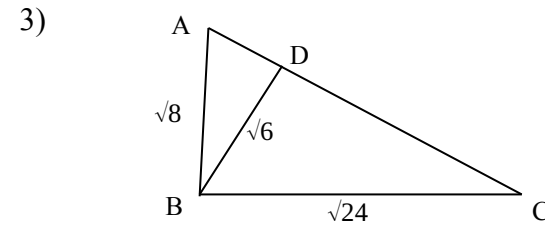


ADB is a right angle. Prove that ABC is a right angle

Problems involving surds



2) Prove that $\sqrt{11+6\sqrt{2}}+\sqrt{11-6\sqrt{2}} = 6$
 [Hint: square this expression]



ADB is a right angle. Prove that ABC is a right angle